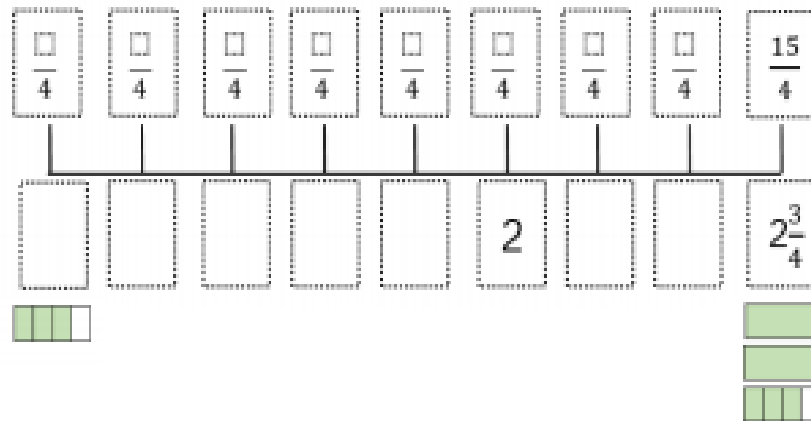
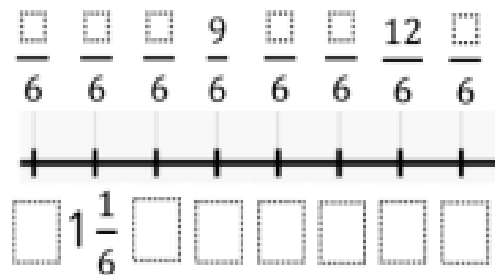
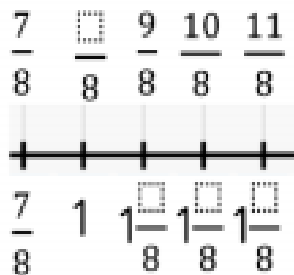


Complete the number line.



Draw bar models to represent each fraction.

Fill in the blanks using cubes or bar models to help you.



Write the next two fractions in each sequence.

a)  $\frac{12}{7}, \frac{11}{7}, \frac{10}{7}, \underline{\quad}, \underline{\quad}$       b)  $3\frac{1}{3}, 3, 2\frac{2}{3}, \underline{\quad}, \underline{\quad}$

c)  $\frac{4}{11}, \frac{6}{11}, \frac{8}{11}, \underline{\quad}, \underline{\quad}$       d)  $12\frac{3}{5}, 13\frac{1}{5}, 13\frac{4}{5}, \underline{\quad}, \underline{\quad}$