


Always, Sometimes, Never?


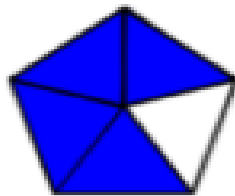
Alex says,

If I split a shape into 4 parts, I have split it into quarters.





Explain your answer.

Which representations of $\frac{4}{5}$ are incorrect?



$$\frac{4}{5}$$



Explain how you know.