



Here is a rectilinear shape.



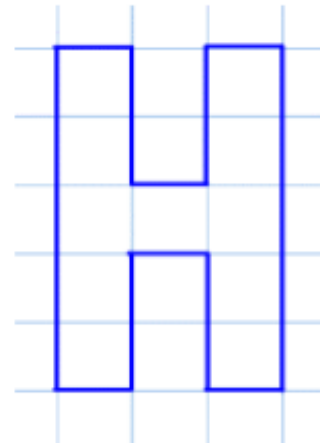
Using 7 more squares, can you make a rectangle?

Can you find more than one way?

Possible answers include:



Can you make some capital letters on squared paper using less than 20 squares?



Make a word from some and count the total area of the letters.

Which letters have a line of symmetry?

What is the area of half of each letter?

Most letters can be made. They could be drawn on large squared paper or made with square tiles.